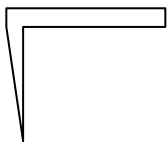




Determine which letter BEST represents the shapes that were used to create the figure shown.

Answers

1)



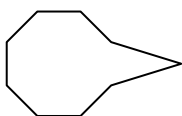
- A. pentagon & quadrilateral
- B. quadrilateral & octagon
- C. rectangle & triangle
- D. heptagon & pentagon

2)



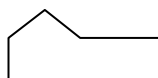
- A. triangle & rectangle
- B. octagon & heptagon
- C. pentagon & square
- D. pentagon & heptagon

3)



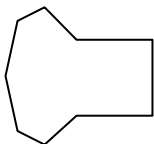
- A. triangle & octagon
- B. triangle & rectangle
- C. hexagon & triangle
- D. octagon & hexagon

4)



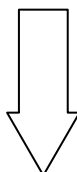
- A. heptagon & quadrilateral
- B. rectangle & pentagon
- C. octagon & pentagon
- D. quadrilateral & triangle

5)



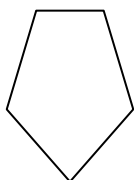
- A. rectangle & hexagon
- B. square & heptagon
- C. hexagon & square
- D. pentagon & triangle

6)



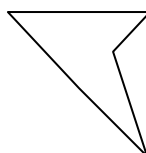
- A. pentagon & octagon
- B. hexagon & triangle
- C. triangle & rectangle
- D. octagon & hexagon

7)



- A. octagon & rectangle
- B. square & pentagon
- C. square & hexagon
- D. quadrilateral & triangle

8)



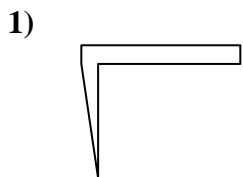
- A. square & hexagon
- B. rectangle & heptagon
- C. triangle & triangle
- D. square & triangle

- 1. _____
- 2. _____
- 3. _____
- 4. _____
- 5. _____
- 6. _____
- 7. _____
- 8. _____

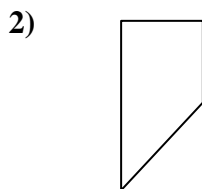


Determine which letter BEST represents the shapes that were used to create the figure shown.

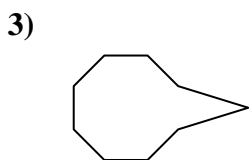
Answers



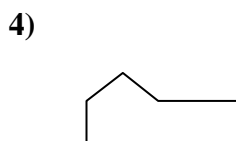
- A. pentagon & quadrilateral
- B. quadrilateral & octagon
- C. rectangle & triangle
- D. heptagon & pentagon



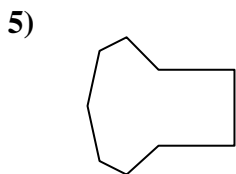
- A. triangle & rectangle
- B. octagon & heptagon
- C. pentagon & square
- D. pentagon & heptagon



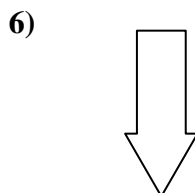
- A. triangle & octagon
- B. triangle & rectangle
- C. hexagon & triangle
- D. octagon & hexagon



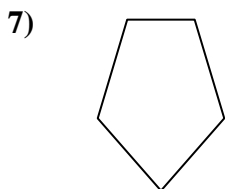
- A. heptagon & quadrilateral
- B. rectangle & pentagon
- C. octagon & pentagon
- D. quadrilateral & triangle



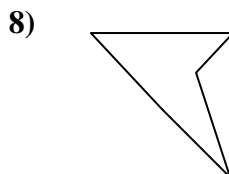
- A. rectangle & hexagon
- B. square & heptagon
- C. hexagon & square
- D. pentagon & triangle



- A. pentagon & octagon
- B. hexagon & triangle
- C. triangle & rectangle
- D. octagon & hexagon



- A. octagon & rectangle
- B. square & pentagon
- C. square & hexagon
- D. quadrilateral & triangle



- A. square & hexagon
- B. rectangle & heptagon
- C. triangle & triangle
- D. square & triangle

- 1. **C**
- 2. **A**
- 3. **A**
- 4. **D**
- 5. **B**
- 6. **C**
- 7. **D**
- 8. **C**